



DOON PUBLIC SCHOOL

(C.B.S.E. Affiliation No. 1030502)

SESSION 2021-22

Worksheet-1 (HOMEWORK)


Subject- MATHS

Class-II

Missing Numbers

Fill in the missing numbers in the hundred grid.

1		3	4		6		8	9	10
11	12		14	15	16	17		19	
	22	23		25		27	28		30
31		33	34		36		38	39	
41	42		44	45		47		49	
	52	53		55	56	57		59	60
61				65	66		68	69	70
	72	73	74		76	77		79	
81	82		84	85		87	88	89	90
	92	93		95	96	97			100





DOON PUBLIC SCHOOL

(C.B.S.E. Affiliation No. 1030502)

SESSION-2021-22

Worksheet-2 (Homework)

Subject-EVS

Class-II

Fill in the missing letters in the crossword getting clues from the pictures. See which community helper's name appears in the red column. Also match the names in the crossword to their pictures:

Illustrations of community helpers: Doctor, Plumber, Sewing, Teacher, Farmer, Pilot, Barber, Mailman.

Now from the above crossword write the names of the helpers who use these tools:



DOON PUBLIC SCHOOL

(C.B.S.E. Affiliation No. 1030502)

SESSION-2021-22



WORKSHEET-3 (HOMEWORK)



SUBJECT- MATHS

CLASS – II

Add the objects and write the sum.

1)  +  =



2)  +  =



3)  +  =

4)  +  =

5)  +  =

6)  +  =

7)  +  =



8)  +  =



9)  +  =

10)  +  =

11)  +  =

12)  +  =

13)  +  =

14)  +  =

15)  +  =

16)  +  =



DOON PUBLIC SCHOOL

(C.B.S.E. Affiliation No. 1030502)

SESSION-2021-22

Worksheet-4 (HOMEWORK)

Subject-Maths

Class-II

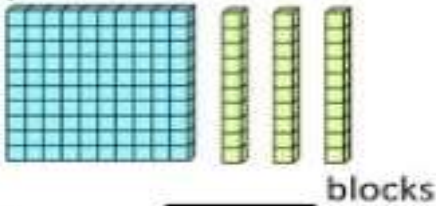


PLACE VALUE BLOCKS TO 1000 SHEET 3

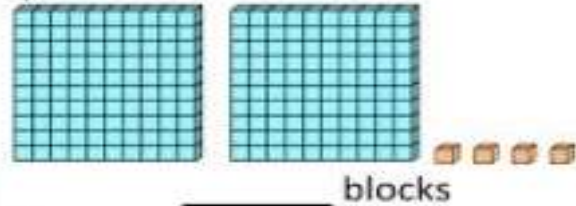


Write down how many blocks are in each set.

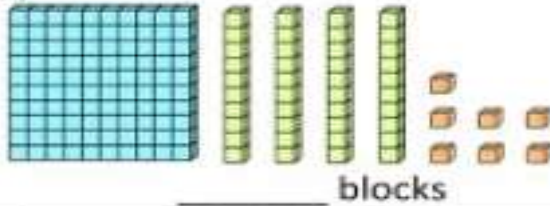
1)



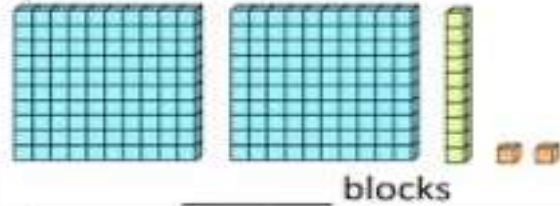
2)



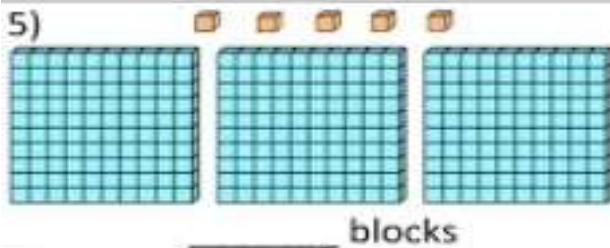
3)



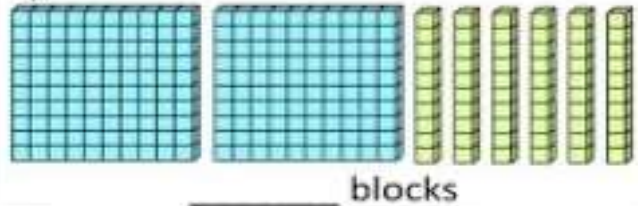
4)



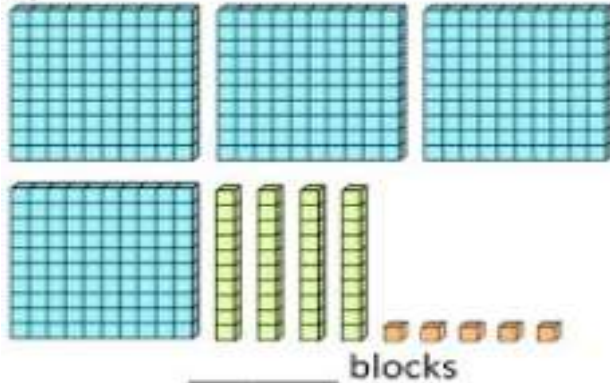
5)



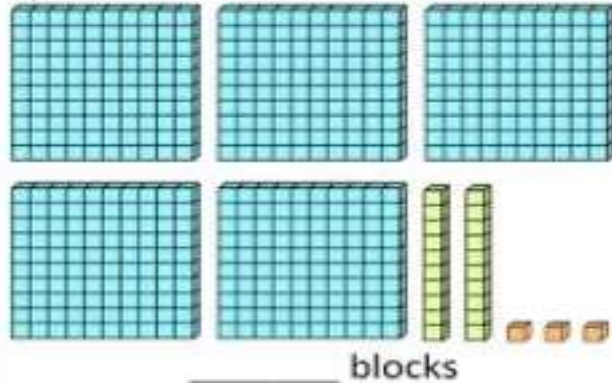
6)



7)



8)





DOON PUBLIC SCHOOL

(C.B.S.E. Affiliation No. 1030502)

SESSION-2021-22

Worksheet-5 (homework)

Subject- Maths

Class-II

COLUMN ADDITION – 3 DIGITS SHEET 2



Try these 3 digit column addition calculations

$$\begin{array}{r} 1) \quad 538 \\ + 363 \\ \hline \end{array}$$

$$\begin{array}{r} 2) \quad 605 \\ + 162 \\ \hline \end{array}$$

$$\begin{array}{r} 3) \quad 749 \\ + 364 \\ \hline \end{array}$$

$$\begin{array}{r} 4) \quad 642 \\ + 517 \\ \hline \end{array}$$

$$\begin{array}{r} 5) \quad 439 \\ + 756 \\ \hline \end{array}$$

$$\begin{array}{r} 6) \quad 528 \\ + 725 \\ \hline \end{array}$$

$$\begin{array}{r} 7) \quad 643 \\ + 169 \\ \hline \end{array}$$

$$\begin{array}{r} 8) \quad 758 \\ + 394 \\ \hline \end{array}$$

$$\begin{array}{r} 9) \quad 592 \\ + 936 \\ \hline \end{array}$$

$$\begin{array}{r} 10) \quad 589 \\ + 644 \\ \hline \end{array}$$

$$\begin{array}{r} 11) \quad 703 \\ + 769 \\ \hline \end{array}$$

$$\begin{array}{r} 12) \quad 956 \\ + 478 \\ \hline \end{array}$$

$$\begin{array}{r} 13) \quad 529 \\ + 78 \\ + 231 \\ \hline \end{array}$$

$$\begin{array}{r} 14) \quad 848 \\ + 57 \\ + 657 \\ \hline \end{array}$$

$$\begin{array}{r} 15) \quad 137 \\ + 309 \\ + 538 \\ \hline \end{array}$$